

**Assignment 22**

**Date: Thursday, 6th January 2022**


**ENGLISH:**

**Task: Read the passage and answer the given questions.**

**COMPREHENSION**

**The Ocean**

The ocean has bright blue water filled with waves. Many types of fish live in the ocean. Seagulls love flying over the ocean to look for a fish. There is soft sand along the shore, and there are pretty seashells in the sand. The ocean is a great place to visit.



Questions:

Write answers to the questions-

1. What color is the water?
2. What lives in the ocean?
3. What is in the sand?
4. Where is the soft sand?
5. Why do seagulls fly over the ocean?
6. Make sentence with-
  - a. fish-
  - b. sand-

## MATHS:

Task – Learn tables 2 to 10 for dodging

# MULTIPLICATION TABLE

$1 \times 1 = 1$	$2 \times 1 = 2$	$3 \times 1 = 3$	$4 \times 1 = 4$	$5 \times 1 = 5$
$1 \times 2 = 2$	$2 \times 2 = 4$	$3 \times 2 = 6$	$4 \times 2 = 8$	$5 \times 2 = 10$
$1 \times 3 = 3$	$2 \times 3 = 6$	$3 \times 3 = 9$	$4 \times 3 = 12$	$5 \times 3 = 15$
$1 \times 4 = 4$	$2 \times 4 = 8$	$3 \times 4 = 12$	$4 \times 4 = 16$	$5 \times 4 = 20$
$1 \times 5 = 5$	$2 \times 5 = 10$	$3 \times 5 = 15$	$4 \times 5 = 20$	$5 \times 5 = 25$
$1 \times 6 = 6$	$2 \times 6 = 12$	$3 \times 6 = 18$	$4 \times 6 = 24$	$5 \times 6 = 30$
$1 \times 7 = 7$	$2 \times 7 = 14$	$3 \times 7 = 21$	$4 \times 7 = 28$	$5 \times 7 = 35$
$1 \times 8 = 8$	$2 \times 8 = 16$	$3 \times 8 = 24$	$4 \times 8 = 32$	$5 \times 8 = 40$
$1 \times 9 = 9$	$2 \times 9 = 18$	$3 \times 9 = 27$	$4 \times 9 = 36$	$5 \times 9 = 45$
$1 \times 10 = 10$	$2 \times 10 = 20$	$3 \times 10 = 30$	$4 \times 10 = 40$	$5 \times 10 = 50$
$6 \times 1 = 6$	$7 \times 1 = 7$	$8 \times 1 = 8$	$9 \times 1 = 9$	$10 \times 1 = 10$
$6 \times 2 = 12$	$7 \times 2 = 14$	$8 \times 2 = 16$	$9 \times 2 = 18$	$10 \times 2 = 20$
$6 \times 3 = 18$	$7 \times 3 = 21$	$8 \times 3 = 24$	$9 \times 3 = 27$	$10 \times 3 = 30$
$6 \times 4 = 24$	$7 \times 4 = 28$	$8 \times 4 = 32$	$9 \times 4 = 36$	$10 \times 4 = 40$
$6 \times 5 = 30$	$7 \times 5 = 35$	$8 \times 5 = 40$	$9 \times 5 = 45$	$10 \times 5 = 50$
$6 \times 6 = 36$	$7 \times 6 = 42$	$8 \times 6 = 48$	$9 \times 6 = 54$	$10 \times 6 = 60$
$6 \times 7 = 42$	$7 \times 7 = 49$	$8 \times 7 = 56$	$9 \times 7 = 63$	$10 \times 7 = 70$
$6 \times 8 = 48$	$7 \times 8 = 56$	$8 \times 8 = 64$	$9 \times 8 = 72$	$10 \times 8 = 80$
$6 \times 9 = 54$	$7 \times 9 = 63$	$8 \times 9 = 72$	$9 \times 9 = 81$	$10 \times 9 = 90$
$6 \times 10 = 60$	$7 \times 10 = 70$	$8 \times 10 = 80$	$9 \times 10 = 90$	$10 \times 10 = 100$

## HINDI:

चित्रों को ध्यान पूर्वक देखें और दिए गए शब्दों की सहायता से कहानी पूरी करें।



शेर

गुस्सा

काम

शरीर

दाँतों

धन्यवाद

ओ

दया


जाल

चुहिया

एक जंगल में एक ..... रहता था। एक दिन वह ..... रहा था। वहाँ पर एक ..... आई। वह शेर के ..... पर चढ़कर दौड़ने लगी। नींद खुलने पर शेर को ..... आया। चुहिया ने माफी माँगी और कहा, 'मैं आपके ..... आ सकती हूँ।' शेर ने उस पर ..... दिखाई और उसे छोड़ दिया। एक दिन शेर शिकारी के ..... में फँस गया।

चुहिया ने अपने तेज ..... से जाल काट दिया। शेर ने चुहिया का ..... किया और अपनी गुफा की ओर बढ़ गया।

नीचे लिखे उपायों को ध्यान से पढ़ें और अपने विचारों को लिखें कि आप पानी को व्यर्थ ना बहाकर प्रकृति को कैसे बचा सकते हैं?




## UOI:


**Task** - Watch the video and reflect on the causes of water pollution through creative mind map.

<https://youtube.com/watch?v=MEb7nnMLcaA&feature=share>


**Reference images for creative mind map**



shutterstock.com · 1205232787



<http://teachduallanguage.blogspot.com/>



## **DANCE**

**Summative Task: - Identify the Hast mudras and name them with the help box.**

**Checklist: -**

- ✓ **Appropriate understanding.**
- ✓ **Knowledgeable**

✓ Good thinker

1



---

2



---

3



---

4



---

5



---

6



---

7



8



***Pataaka, Tripataaka, Ardha pataaka, Kartarimukha, Mayura, Ardhachandra, Arala, Shukatunda, Mushthi, Shikhara***

## **ART**

### *Summative Task*

*Drawing and colouring activity - Learners will draw and color the drawing for water conservation. For reference picture is given below.*





*Criteria for assessment*

*Choice of content*

*Neatness*

*Creativity*